


JAWAPAN

UNIT
1

NOMOR HINGGA 100

A

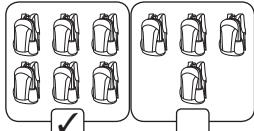
1



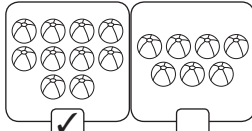
2



3




4

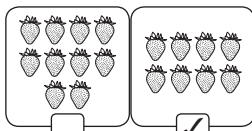


B

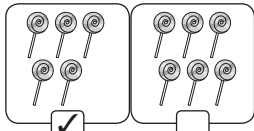
1




2



3



4

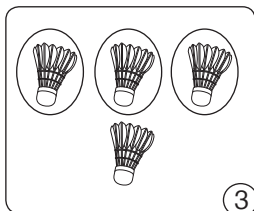


C

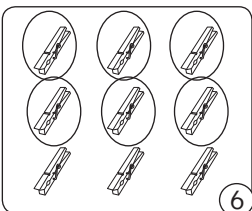
- 1 satu
- 2 enam
- 3 empat
- 4 sepuluh

D

1

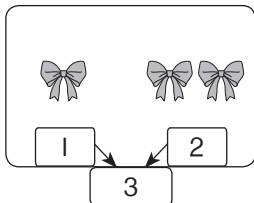


2

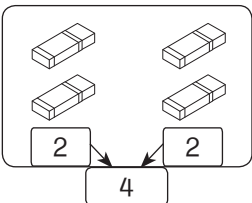


E

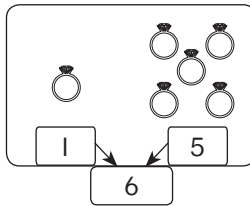
1



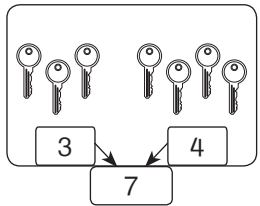
2



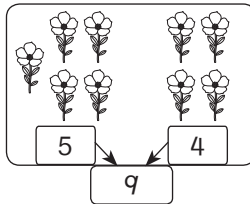
3



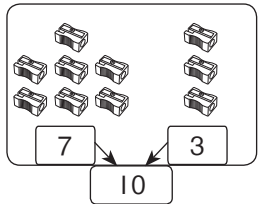
4



5



6



F

- 1 Dua belas; 12
- 2 Enam puluh lima; 65
- 3 Dua puluh lima; 25
- 4 Tiga puluh tiga; 33

G

- 1 Lima belas
- 2 83
- 3 39
- 4 Enam puluh tujuh

H

- 1 21; Dua puluh satu
- 2 37; Tiga puluh tujuh
- 3 54; Lima puluh empat
- 4 60; Enam puluh

I

- 1 puluh
- 2 sa
- 3 sa
- 4 puluh

J

- 1 Sa; 6
- 2 Puluh; 70
- 3 Puluh; 30
- 4 Sa; 2
- 5 Sa; 1
- 6 Puluh; 90

K

- 1 4
- 2 2
- 3 4
- 4 6

- L 1 2
2 6
3 sebelum
4 8
5 3

- M 1 11, 12, 13, 14, 15, 16
2 99, 98, 97, 96, 95, 94

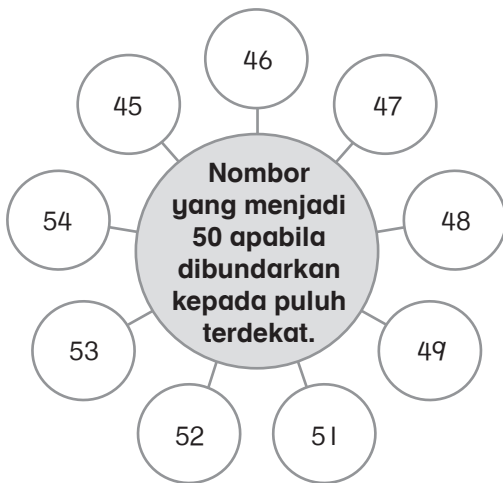
- N 1 Nombor 3 dan 4 disusun berulang
2 Bilangan menaik dua-dua dari 20 hingga 30

- O 1 15; 14; 15
2 20; 50; 60
3 70; 69; 65
4 6; 5; 4

- P 1 10
2 30

- Q 1 30
2 40
3 34
4 35

R



- S 1 Nombor paling kecil : 13
Nombor paling besar : 83

2



Jawapan: Nombor 9

- 3 11, 22, 33, 44, 55, 66, 77, 88, 99

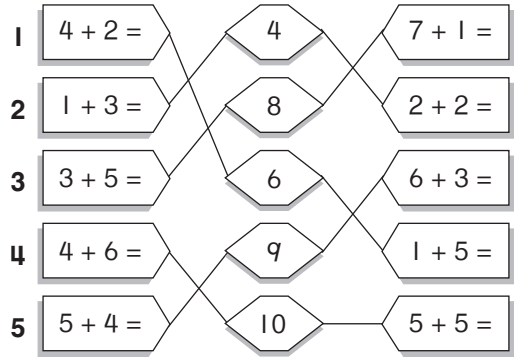
Jawapan: Ada 9 keping kad yang mempunyai nombor dua digit yang sama.

UNIT
2

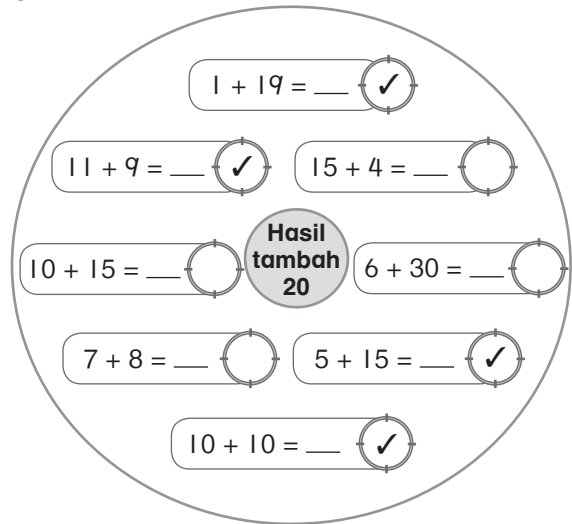
TAMBAH DAN TOLAK

- A 1 $5 + 1 = 6$
2 $6 + 2 = 8$
3 $7 - 2 = 5$
4 $10 - 4 = 6$

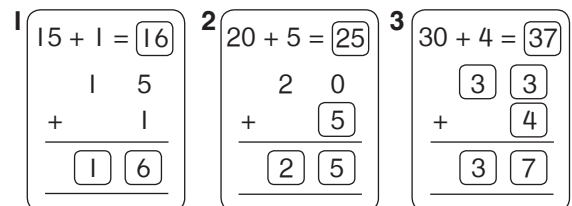
B



C



D



4 $12 + 32 = 44$

$$\begin{array}{r} 12 \\ + 32 \\ \hline 44 \end{array}$$

5 $61 + 27 = 88$

$$\begin{array}{r} 61 \\ + 27 \\ \hline 88 \end{array}$$

6 $43 + 50 = 93$

$$\begin{array}{r} 43 \\ + 50 \\ \hline 93 \end{array}$$

7 $19 - 10 = 9$

$$\begin{array}{r} 19 \\ - 10 \\ \hline 9 \end{array}$$

8 $55 - 44 = 11$

$$\begin{array}{r} 55 \\ - 44 \\ \hline 11 \end{array}$$

9 $89 - 31 = 58$

$$\begin{array}{r} 89 \\ - 31 \\ \hline 58 \end{array}$$

7 $13 + 6 = 19$

$$\begin{array}{r} 13 \\ + 6 \\ \hline 19 \end{array}$$

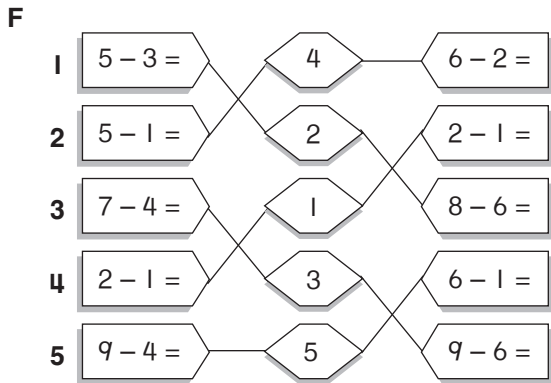
8 $71 + 1 = 72$

$$\begin{array}{r} 71 \\ + 1 \\ \hline 72 \end{array}$$

9 $54 + 14 = 68$

$$\begin{array}{r} 54 \\ + 14 \\ \hline 68 \end{array}$$

- E
- $2 + 2 + 2 = 6$
 - $3 + 3 + 3 + 3 = 12$
 - $5 + 5 + 5 + 5 = 20$
 - $4 + 4 + 4 + 4 + 4 = 20$



G

1 $15 - 1 = 14$

$$\begin{array}{r} 15 \\ - 1 \\ \hline 14 \end{array}$$

2 $24 - 3 = 21$

$$\begin{array}{r} 24 \\ - 3 \\ \hline 21 \end{array}$$

3 $37 - 24 = 35$

$$\begin{array}{r} 37 \\ - 24 \\ \hline 35 \end{array}$$

4 $46 - 13 = 33$

$$\begin{array}{r} 46 \\ - 13 \\ \hline 33 \end{array}$$

5 $67 - 10 = 57$

$$\begin{array}{r} 67 \\ - 10 \\ \hline 57 \end{array}$$

6 $79 - 53 = 26$

$$\begin{array}{r} 79 \\ - 53 \\ \hline 26 \end{array}$$

- H
- 15 biji guli
 - 59 biji kuih
 - 16 biji epal
 - 41 ekor kambing

UNIT 3 PECAHAN

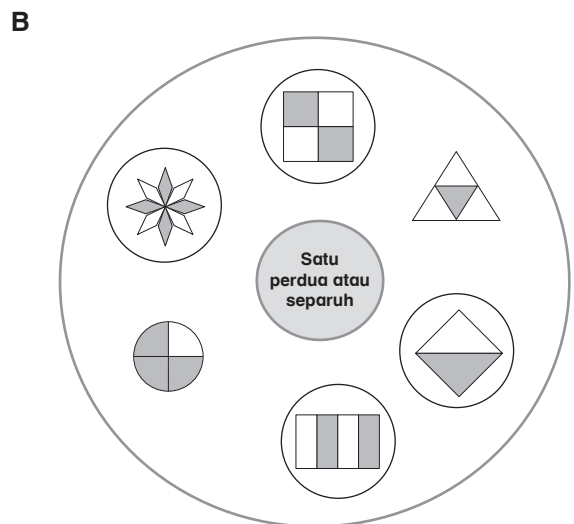
A

1 satu perdua

2 dua perempat

3 satu perempat

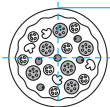
4 tiga perempat



C

1 separuh	2 suku
3 satu perdua	4 satu perempat
5 tiga perempat	6 tiga suku


D 1



1 bahagian
murid dapat

Jawapan: **Tiga suku atau tiga perempat**
bahagian pizza yang masih ada

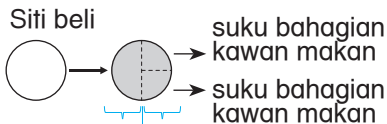
2



Ada 4 bahagian.
Suku bahagian ialah epal.
3 suku lagi strawberi.
Jawapan: **Strawberi**

#Terima apa-apa saja jawapan
(gambar) yang munasabah.

3



separuh Siti makan | separuh kawan-kawan makan

Jawapan: Setiap rakan Siti makan **satu perempat atau suku** bahagian daripada kek itu.

UNIT 4 **WANG**

- A 1 Nombor 10; Warna perak; Bunga raya
2 Nombor 20; Warna emas; Bunga raya
3 Nombor 1; Warna biru; Wau bulan
4 Nombor 5; Warna hijau; Burung kenyalang

B

1 	50 sen
2 	RM8
3 	RM2
4 	RM10
5 	85 sen

- C 1 50 sen 2 65 sen
3 RM1 4 RM30
5 RM5 6 90 sen

D

E



F 1 $RM2 - RM1 = RM1$
Baki wang Daffa ialah RM1



Jawapan: Jumlah wang yang Mysha ada ialah **50 sen**.

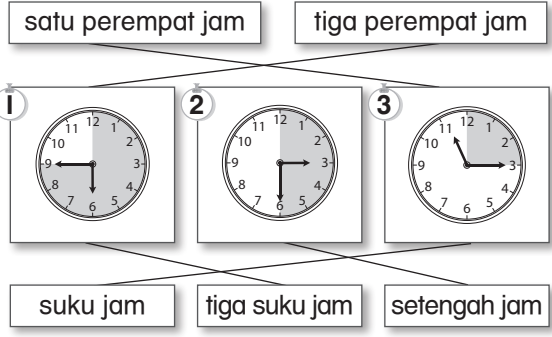
3

Cadangan 1	Cadangan 2
<p>RM3.40</p> <p>Gabungan 2 keping RM1, 2 keping 50 sen dan 2 keping 20 sen.</p>	<p>RM3.50</p> <p>Gabungan 2 keping RM1 dan 3 keping 50 sen.</p>

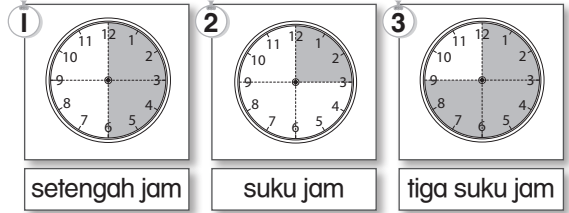
UNIT 5 MASA DAN WAKTU

- A
- 1 pagi
 - 2 tengah hari
 - 3 petang
 - 4 malam
- B
- 1 belajar di sekolah
 - 2 makan tengah hari
 - 3 siram bunga
 - 4 menonton televisyen

C



D




- E
- 1 Pukul sembilan setengah
 - 2 Pukul enam suku
 - 3 Pukul lapan suku
 - 4 Pukul lima
 - 5 Pukul satu setengah

- F
- 1 Isnin
 - 2 Selasa
 - 3 Rabu
 - 4 Khamis
 - 5 Jumaat
 - 6 Sabtu
 - 7 Ahad

- G
- 1 Rabu
 - 2 Isnin
 - 3 Sabtu
 - 4 Selasa
 - 5 Jumaat
 - 6 Ahad

H



I 1



Pukul enam setengah

- 2 Ogos
- 3 Kali pertama – Selasa
Kali kedua – Khamis
Kali ketiga - Sabtu

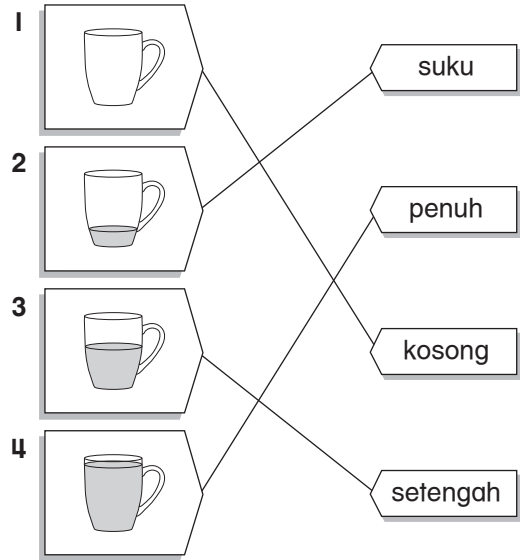
UNIT 6

PANJANG, JISIM DAN ISI PADU CECAIR

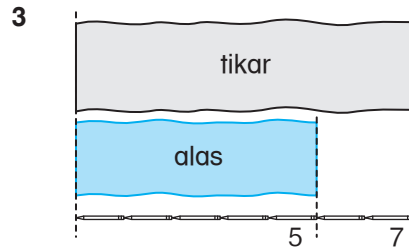
- A**
- 1 Tinggi; Rendah
 - 2 Panjang; Pendek
 - 3 Pendek; Panjang
 - 4 Rendah; Tinggi
 - 5 Rendah; Tinggi
 - 6 Panjang; Pendek
- B**
- 1 langkah
 - 2 depa
 - 3 jengka;
- C**
- 1 9 jengkal
 - 2 11 langkah
 - 3 2 depa
- D**
- 1 1
 - 2 3
 - 3 berat
 - 4 ringan
 - 5 2
 - 6 3

- E**
- 1 banyak; sedikit
 - 2 sedikit; banyak
 - 3 sedikit; banyak
 - 4 banyak; sedikit

F



- G**
- 1 Paling berat: Tembikai
Paling ringan: betik
 - 2 Satu jag = 1 + 6 cawan air oren
= 7 cawan









Jawapan: Kain itu tidak cukup untuk mengalask meja kerana meja lebih panjang daripada kain.

UNIT 7

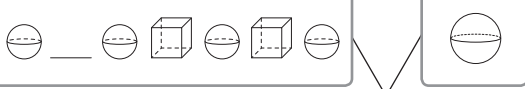
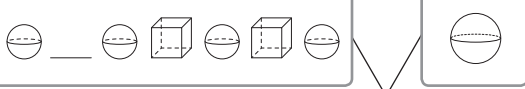
BENTUK

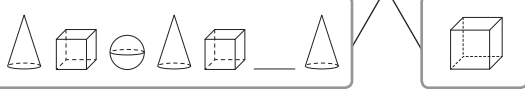
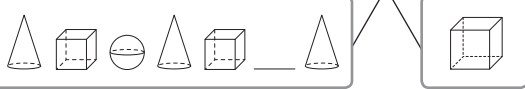
- A**
- 1 kubus
 - 2 kuboid
 - 3 piramid
 - 4 sfera
 - 5 kon
 - 6 silinder

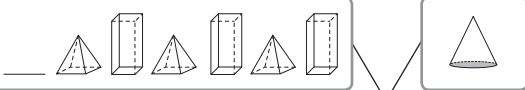
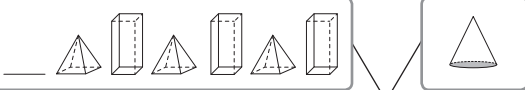
B



Bentuk	Nama bentuk	Bilangan bucu	Bilangan sisi lurus	Bilangan permukaan rata	Bilangan permukaan melengkung
1 	Kubus	8	12	6	0
2 	Kuboid	8	12	6	0
3 	Piramid	5	8	5	0
4 	Sfera	0	0	0	1
5 	Kon	1	0	1	1
6 	Silinder	0	0	2	1

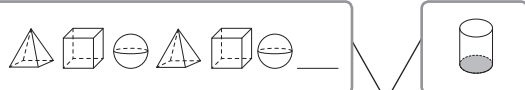
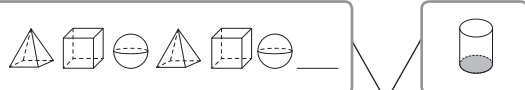
C



1  

2  

3  


4  

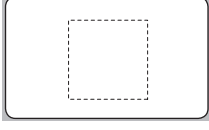
5  


6  

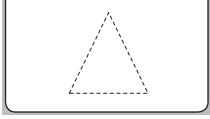
D

I

1  segi empat sama


2  segi empat tepat


3  segi tiga


4  bulatan


E

Bentuk 2D



1  Segi empat sama
Sisi lurus : 4
Sisi melengkung: 0
Bucu : 4



2  Segi empat sama
Sisi lurus : 4
Sisi melengkung: 0
Bucu : 4



3  Segi tiga
Sisi lurus : 3
Sisi melengkung: 0
Bucu : 3

4  Bulatan
Sisi lurus : 0
Sisi melengkung: 1
Bucu : 0


F


1  


2  

3  

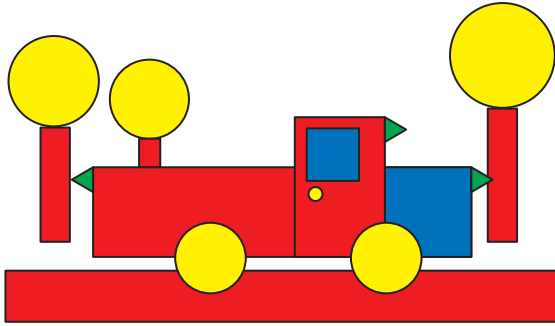
G





1 

2 

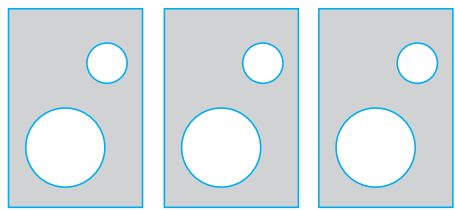
3 

H



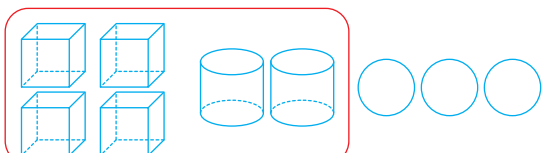
Bentuk				
Bilangan	3	2	6	6

I 1



3 segi empat tepat dan 6 bulatan

2











Bentuk 3D Bentuk 2D

Jawapan: Bentuk 3D yang dipilih ialah kubus dan silinder iaitu 6 semuanya. Bulatan tidak dimasukkan kerana ia bukan bentuk 3D tetapi 2D.

3 segi empat tepat dan 6 bulatan

UNIT 8 DATA

A

	Pakaian	Gundalan	Bilangan
1			11
2			3
3			4
4			5

B

- 1 Permainan kegemaran
- 2 Makanan kegemaran
- 3 Minuman kegemaran
- 4 Hobi
- 5 Animasi kegemaran
- 6 Buah kegemaran

C

- 1 makanan kegemaran
- 2 nasi lemak
- 3 7
- 4 Soto
- 5 mi goreng
- 6 20

D

- 1 Rabu
- 2 1
- 3 1 biji
- 4 RM3
- 5 6
- 6 18

**PENTAKSIRAN AKHIR SESI AKADEMIK
(PASA)**

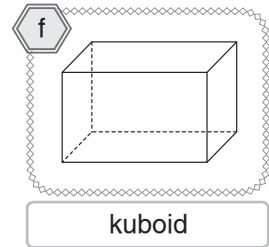
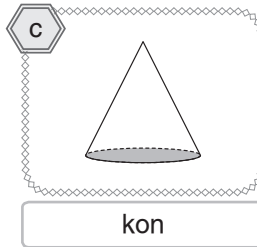
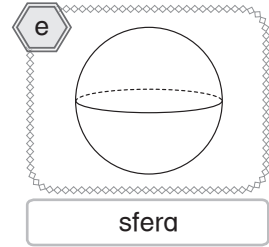
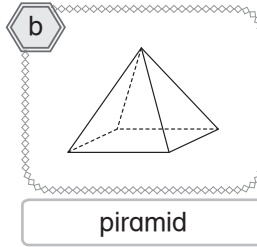
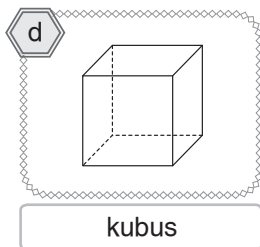
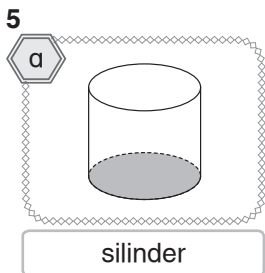
BAHAGIAN A

- 1 D 2 B 3 A 4 C 5 B
 6 C 7 B 8 A 9 D 10 C
 11 C 12 B 13 B 14 D 15 A
 16 C 17 A 18 D 19 D 20 A

BAHAGIAN B


- 1 (a) 2, dua
 (b) 8, lapan
 (c) 12, dua belas
 (d) 21, dua puluh satu
- 2 (a) 7
 (b) 65
 (c) 15
 (d) 90
 (e) 87
 (f) 44
- 3 (a) Tertib menaik: 5, 15, 25, 35, 45
 (b) Tertib menurun: 45, 35, 25, 15, 5

- 4 (a)
$$\begin{array}{r} 22 \\ + 10 \\ \hline 32 \end{array}$$
 (b)
$$\begin{array}{r} 63 \\ + 34 \\ \hline 97 \end{array}$$
- (c)
$$\begin{array}{r} 10 \\ + 35 \\ \hline 45 \end{array}$$
 (d)
$$\begin{array}{r} 19 \\ - 15 \\ \hline 4 \end{array}$$
- (e)
$$\begin{array}{r} 83 \\ - 62 \\ \hline 21 \end{array}$$
 (f)
$$\begin{array}{r} 48 \\ - 32 \\ \hline 16 \end{array}$$



- 6 (a) Tahun 1 Delima
 (b) air coklat
 (c) air barli
 (d) 3
 (e) air oren
 (f) 14

7 (a) Ayat matematik: $8 - 1 - 2 = 5$



Jawapan: Bilangan anak kucing Bella yang tinggal ialah 5 ekor.

(b) Ayat matematik: $RM5 - RM1 - RM2 = RM2$

$$\begin{array}{r} RM\ 5 \\ - RM\ 1 \\ \hline RM\ 4 \end{array} \quad \begin{array}{r} RM\ 4 \\ - RM\ 2 \\ \hline RM\ 2 \end{array}$$

Jawapan: Baki wang yang Vivian terima ialah RM2.

(c)

Ayat matematik: $10 + 5 =$

$$\begin{array}{r} 10 \\ + 5 \\ \hline 15 \end{array}$$

Jawapan: Jumlah guli yang mereka beli ialah 15 biji.

(d)

Ayat matematik: $RM2 + RM10$

=

$$\begin{array}{r} RM 2 \\ + RM 10 \\ \hline RM 12 \end{array}$$

Jawapan: Jumlah wang yang Ayesha ada sekarang ialah RM12.